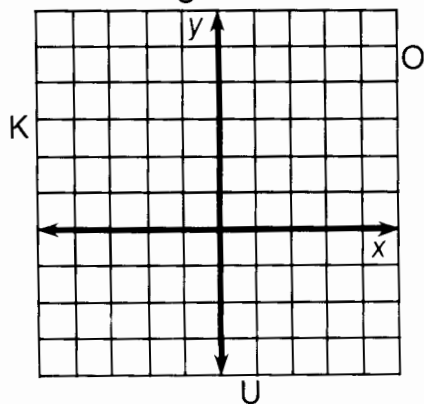


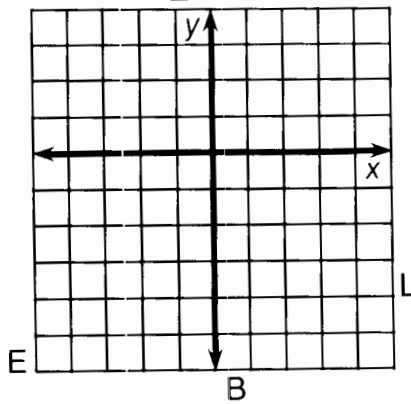
Whom Should You See at the Bank If You Need To Borrow Money?

Use the slope and y -intercept to graph each equation below. The graph, if extended, will cross a letter. Print this letter in each box that contains the number of that exercise.

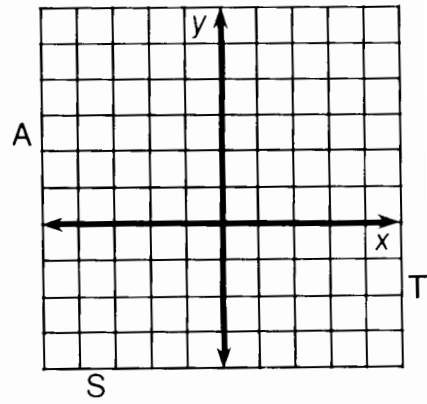
① $y = \frac{2}{3}x + 1$



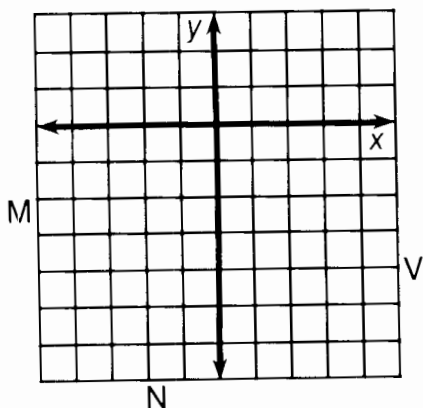
② $y = \frac{1}{2}x - 3$



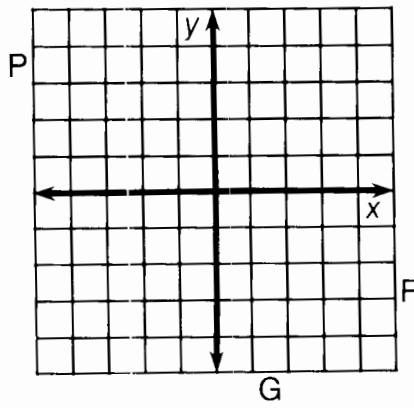
③ $y = -\frac{3}{4}x + 2$



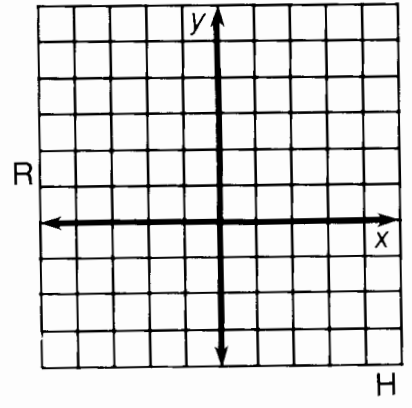
④ $y = 2x - 4$



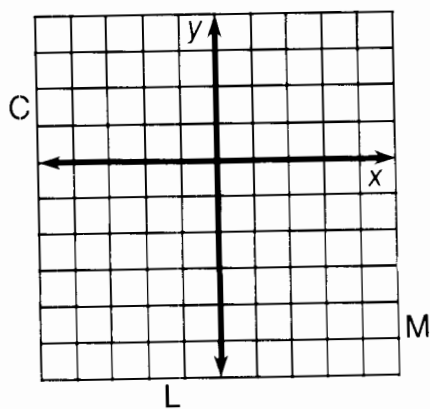
⑤ $y = -3x - 1$



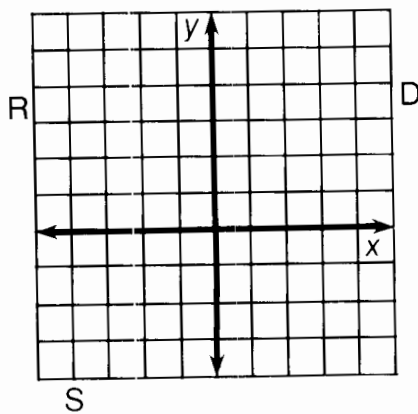
⑥ $y = -\frac{3}{2}x + 3$



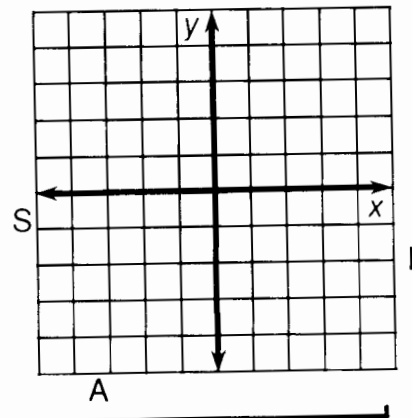
⑦ $y = 4x - 2$



⑧ $y = -\frac{1}{4}x + 2$



⑨ $y = \frac{5}{3}x$



3	6	2	7	1	9	4	9	8	8	9	4	5	2	8
---	---	---	---	---	---	---	---	---	---	---	---	---	---	---